



THE VILLAGE
INTERNATIONAL SCHOOL
"We Nurture Dreams"

Question Bank – Answer Key

Grade: 4

Subject: Mathematics

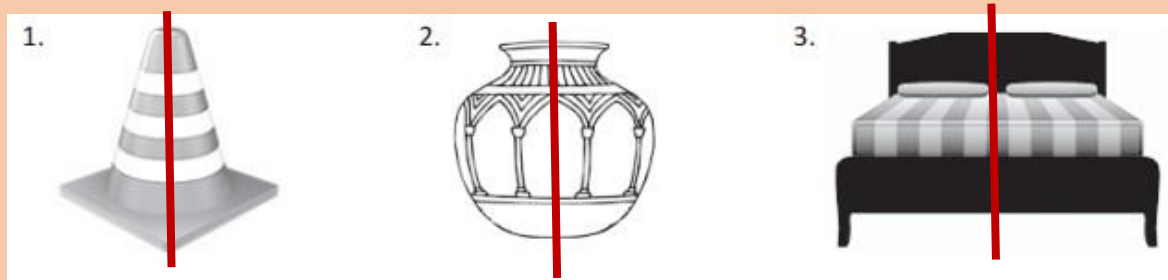
Chapter 1: Geometry

1. Centre = O

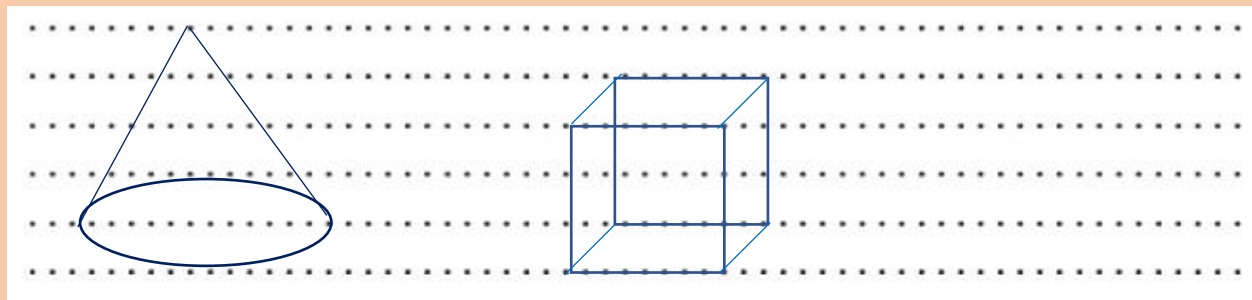
Radius = OM and ON

Diameter = MN

2. Draw lines to cut the objects into their mirror halves.



3.



4.

1) Edges = 12

Faces = 6

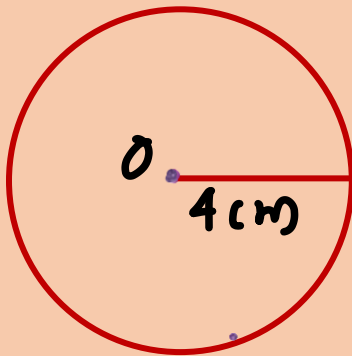
Vertices = 8

2) Edges = 2

Faces = 3

Vertices = 0

5. A.



B.

